



11 + Practice Papers

*Give your child the best!*



11 + Practice Papers

*Give your child the best!*

# 11+ NON-VERBAL REASONING QUESTIONS

## TYPE 5 IN COMMON (c)

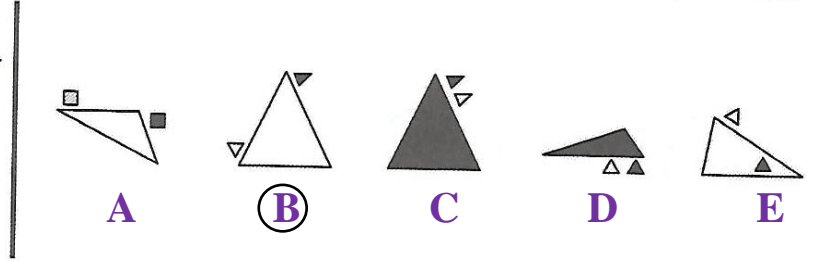
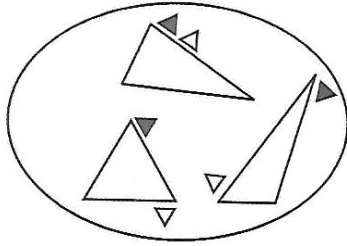
Created by:

[11practicepapers.co.uk](http://11practicepapers.co.uk)

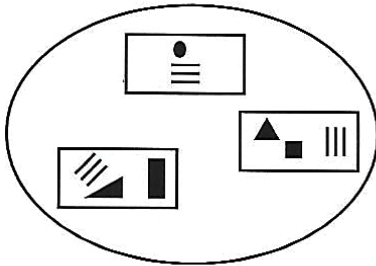
# TYPE - 5 IN COMMON (c)

The three figures in the oval are similar in some way.  
Decide which figure is most similar to the ones in the oval and circle the letter below it.


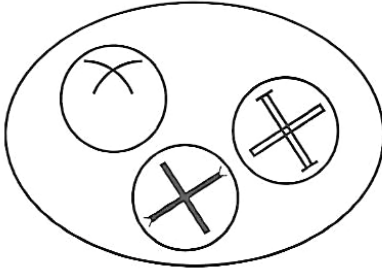
## EXAMPLE



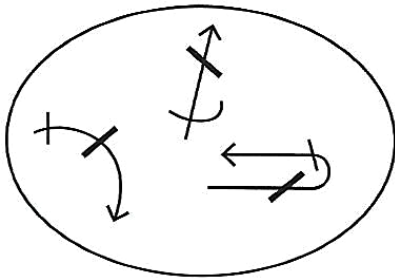
(1)



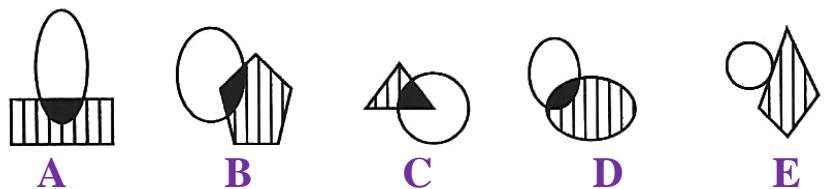
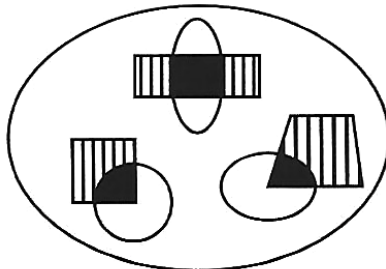
(2)



(3)



(4)



# TYPE - 5 IN COMMON (c)



<u>Question No.</u>	<u>ANSWERS</u>	<u>Mark (s)</u>
1.	A Each figure in the oval consists of a rectangle containing small black shapes and three parallel lines that are spaced the same in all three figures. <b>Therefore, the answer is A.</b>	1
2.	B Each figure in the oval consists of a circle with a cross inside that has one line of symmetry. <b>Therefore, the answer is B.</b>	1
3.	D Each figure on the left consists of an arrow with two straight lines crossing it, one of which is bold. <b>Therefore, the answer is D.</b>	1
4.	A Each figure on the left consists of a quadrilateral overlapping an oval. The overlapping area is black and the part of the quadrilateral that does not overlap is shaded with vertical lines. <b>Therefore, the answer is A.</b>	1